

**Lógica Quântica**  
**Lecture notes and exercise sheet 2**  
**Universal constructions**

Rui Soares Barbosa

2022–2023

### Initial and terminal objects

**Definition 1.** An *initial object* in a category  $\mathbf{C}$  is an object  $I$  of  $\mathbf{C}$  such that for every object  $A$  of  $\mathbf{C}$  there exists a unique arrow from  $I$  to  $A$ .

A *terminal object* in a category  $\mathbf{C}$  is an object  $T$  of  $\mathbf{C}$  such that for every object  $A$  of  $\mathbf{C}$  there exists a unique arrow from  $A$  to  $T$ .

A *zero object* in a category  $\mathbf{C}$  is an object that is both initial and terminal in  $\mathbf{C}$ .

**Exercise 1.** Show that:

- (a) in **Set**,  $\emptyset$  is initial and a singleton set is terminal;
- (b) **Rel** has a zero object,  $\emptyset$ ;
- (c) **Vect** has a zero object, the zero-dimensional space.

**Exercise 2.** In a poset regarded as a category (exercise 1.4), what is a terminal (respectively, initial) object?

**Exercise 3.** Show that any arrow from a terminal to an initial object is an iso.

The following exercise aims to show that terminal (and initial) objects are essentially unique: they are unique up to unique isomorphism.

**Exercise 4.** In a category  $\mathbf{C}$  show that

- (a) If  $T$  and  $T'$  are terminal then they are isomorphic, and there is a unique isomorphism between them.
- (b) If  $T$  is terminal and  $A$  is isomorphic to  $T$  then  $A$  is terminal.
- (c) If  $T$  is terminal and there is an epic arrow  $f: T \rightarrow A$  then  $A$  is terminal.

### Products and coproducts

**Definition 2.** Let  $A$  and  $B$  be objects in a category  $\mathbf{C}$ . A product of  $A$  and  $B$  is an object  $A \times B$  together with arrows

$$\pi_A: A \times B \rightarrow A \quad \text{and} \quad \pi_B: A \times B \rightarrow B$$

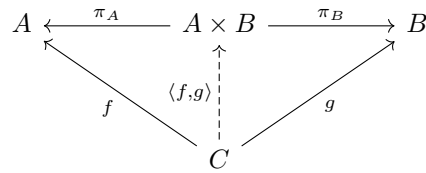
such that for every object  $C$  and arrows

$$f: C \rightarrow A \quad \text{and} \quad g: C \rightarrow B$$

there exists a unique arrow  $\langle f, g \rangle: C \rightarrow A \times B$  such that

$$\pi_A \circ \langle f, g \rangle = f \quad \text{and} \quad \pi_B \circ \langle f, g \rangle = g,$$

i.e. such that the following diagram commutes:



**Definition 3.** Let  $A$  and  $B$  be objects in a category  $\mathbf{C}$ . A coproduct of  $A$  and  $B$  is an object  $A + B$  together with arrows

$$\iota_A: A \longrightarrow A + B \quad \text{and} \quad \iota_B: B \longrightarrow A + B$$

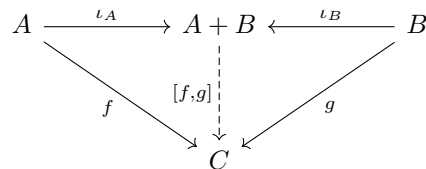
such that for every object  $C$  and arrows

$$f: A \longrightarrow C \quad \text{and} \quad g: B \longrightarrow C$$

there exists a unique arrow  $[f, g]: A + B \longrightarrow C$  such that

$$[f, g] \circ \iota_A = f \quad \text{and} \quad [f, g] \circ \iota_B = g,$$

i.e. such that the following diagram commutes:



That is, the product  $A \times B$  is the ‘most general’ object that admits an arrow to each of  $A$  and  $B$ ; the coproduct  $A + B$  is the ‘most general’ object that admits an arrow from each of  $A$  and  $B$ .

**Exercise 5.** Show that in **Set** products and coproducts are given by the cartesian product  $A \times B = \{(a, b) \mid a \in A \text{ and } b \in B\}$  and disjoint union  $A + B = \{\iota_A(a) \mid a \in A\} \cup \{\iota_B(b) \mid b \in B\}$ .

**Exercise 6.** Show that in a poset regarded as a category, products are greatest lower bounds and coproducts are least upper bounds.

**Exercise 7.** Characterise the products and coproducts in the category **Pos** of posets and monotone functions.

**Exercise 8.** A *discrete category* is a category whose only arrows are the identity arrows. When do such categories have initial and terminal objects? What pairs of objects have products or coproducts?

**Exercise 9.** Show that (co)products of two objects  $A$  and  $B$  are unique up to unique isomorphism.

**Exercise 10.** Show that the uniqueness part of the definition of product can be expressed equationally as

$$h = \langle \pi_A \circ h, \pi_B \circ h \rangle$$

for all  $h$  of the appropriate type (which?). That is, show that in the definition of product, one could replace

‘there exists a unique arrow  $\langle f, g \rangle: C \longrightarrow A \times B$  such that ...’

by

‘there exists an arrow  $\langle f, g \rangle: C \longrightarrow A \times B$  such that ..., and moreover, for all arrows  $h$ ,  $h = \langle \pi_A \circ h, \pi_B \circ h \rangle$ .’

**Exercise 11.** Show that the following laws hold in any category where the product  $A \times B$  exists.

(a) *product reflection:*  $\langle \pi_A, \pi_B \rangle = \pi_{A \times B}$

(b) *product fusion:*  $\langle f, g \rangle \circ h = \langle f \circ h, g \circ h \rangle$  for all  $f, g, h$  suitably typed (what is their type?).

**Exercise 12.** Given arrows  $f: A \rightarrow A'$  and  $g: B \rightarrow B'$  and supposing that the products  $A \times B$  and  $A' \times B'$  exist, define an arrow

$$f \times g: A \times B \rightarrow A' \times B'$$

by

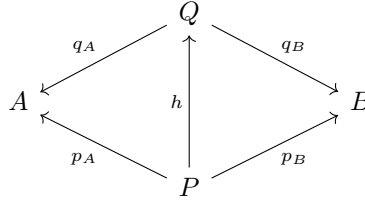
$$f \times g = \langle f \circ \pi_A, g \circ \pi_B \rangle.$$

Show that the following laws hold:

- (a) *product absorption:*  $(f \times g) \circ \langle h, k \rangle = \langle f \circ h, g \circ k \rangle$
- (b)  $\text{id}_A \times \text{id}_B = \text{id}_{A \times B}$
- (c)  $(f \times g) \circ (h \times k) = (f \circ h) \times (g \circ k)$ .

**Exercise 13.** What are the corresponding (dual) statements for coproducts to exercise 10, exercise 11, and exercise 12?

**Exercise 14.** Given a category  $\mathbf{C}$  and objects  $A, B$  of  $\mathbf{C}$ , define a new category  $\text{Pair}(A, B)$  whose objects are triples  $(P, p_A, p_B)$  with  $P$  an object of  $\mathbf{C}$  and  $p_A: P \rightarrow A$ ,  $p_B: P \rightarrow B$  arrows of  $\mathbf{C}$ , and an arrow of type  $(P, p_A, p_B) \rightarrow (Q, q_A, q_B)$  is an arrow  $h: P \rightarrow Q$  of  $\mathbf{C}$  such that the following diagram commutes:



- (a) Show that  $\text{Pair}(A, B)$  is indeed a well-defined category.
- (b) Can you phrase what it means to be a product of  $A$  and  $B$  (in  $\mathbf{C}$ ) as a special object of the category  $\text{Pair}(A, B)$ ?
- (c) Observe that exercise 9 follows from a similar result proved earlier (which?).
- (d) How do these statements dualise for coproduct?

## Biproduct

Sometimes products and coproducts coincide. A biproduct is an object that is both a product and a coproduct ‘in a compatible way’.

**Definition 4.** Let  $A$  and  $B$  be objects in a category  $\mathbf{C}$ . A biproduct of  $A$  and  $B$  is an object  $A \oplus B$  together with arrows

$$A \begin{array}{c} \xrightarrow{\iota_A} \\ \xleftarrow{\pi_A} \end{array} A \oplus B \begin{array}{c} \xleftarrow{\iota_B} \\ \xrightarrow{\pi_B} \end{array} B$$

such that  $(A \oplus B, \pi_A, \pi_B)$  is a product of  $A$  and  $B$ ,  $(A \oplus B, \iota_A, \iota_B)$  is a coproduct of  $A$  and  $B$  and moreover,

$$\begin{aligned} \pi_A \circ \iota_A &= \text{id}_A \\ \pi_B \circ \iota_B &= \text{id}_B \\ \iota_A \circ \pi_A \circ \iota_B \circ \pi_B &= \iota_B \circ \pi_B \circ \iota_A \circ \pi_A \end{aligned}$$

**Exercise 15.** Show that  $\mathbf{Rel}$  has biproducts for every pair of elements, given by the disjoint union of sets.

**Exercise 16.** Show that  $\mathbf{Vect}$  has biproducts for every pair of elements, given by the direct sum of vector spaces.